

练习题一 音的长短



一、写出下列音符、休止符名称

() () () () () () () () () () () ()

() () () () () () () () () () () ()

()


 ()

二、写出下列时值相对应的音符或休止符

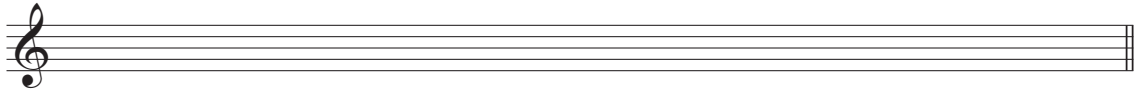
三、将下列音符或休止符按要求扩大或缩小




1. 扩大为原时值的二倍



2. 缩小为原时值的二分之一



四、将下列时值扩大到原来的四倍重新记谱



五、写出下列拍号的含义

1. $\frac{3}{4}$ _____

2. $\frac{6}{8}$ _____

3. $\frac{2}{2}$ _____

4. C _____

5. $\frac{5}{4}$ _____

六、用“强”“弱”“次强”“弱”表示下列节拍的强弱规律

$\frac{2}{4}$ _____

$\frac{3}{4}$ _____

$\frac{1}{2}$ _____

C _____

C _____

$\frac{7}{4}$ _____

$\frac{3}{2}$ _____

$\frac{9}{8}$ _____

$\frac{12}{8}$ _____

$\frac{3}{8}$ _____

$\frac{7}{8}$ _____

$\frac{4}{4}$ _____

七、辨别下列拍子的类型（如单拍子、复拍子、混合拍子、散拍子）

$\frac{6}{4}$	$\frac{4}{2}$	$\frac{3}{8}$	$\frac{7}{4}$	$\frac{9}{8}$	$\frac{1}{4}$	$\frac{7}{8}$	$\frac{12}{8}$
()	()	()	()	()	()	()	()
$\frac{5}{4}$	$\frac{2}{2}$	$\frac{3}{4}$	$\frac{6}{8}$	C	C	$\frac{3}{2}$	サ
()	()	()	()	()	()	()	()

八、用正确的切分节奏型重写下列

()	()	()	()

九、写出下列节奏片段中包含几个切分重音




$\frac{2}{4}$	()
$\frac{3}{4}$	()
$\frac{4}{4}$	()

十、在小节末尾用休止符补足所缺的音值

十一、写出下列音符在指定拍子中所占的拍数

	$\frac{3}{2}$	$\frac{2}{4}$	$\frac{6}{8}$	$\frac{7}{16}$	C
	()	()	()	()	()
	()	()	()	()	()
	()	()	()	()	()
	()	()	()	()	()
	()	()	()	()	()

十二、用一个音符或附点音符写出下列音符时值的总和




 = ()
  = ()
  = ()

 = ()
  = ()
  = ()

 = ()
  = ()
  = ()

 = ()
  = ()
  = ()

 = ()
  = ()
  = ()





 = ()
  = ()
  = ()

 = ()
  = ()
  = ()

 = ()
  = ()
  = ()

 = ()
  = ()
  = ()
  = ()





 = ()
  = ()
  = ()
  = ()

 = ()
  = ()
  = ()
  = ()





 = ()
  = ()
  = ()
  = ()

 = ()
  = ()
  = ()
  = ()

十三、写出等于下列音符时值的三连音、五连音、六连音、七连音、九连音

	三连音	五连音	六连音	七连音	九连音
	()	()	()	()	()
	()	()	()	()	()
	()	()	()	()	()
	()	()	()	()	()

十四、写出等于下列音符时值的二连音、四连音

	二连音	四连音
	()	()
	()	()
	()	()
	()	()

十五、完成下列等式

1个 \circ = 2个()	4个 \circ = 8个()	2个 \circ = 4个()
8个 ♪ = 2个()	4个 ♪ = 1个()	2个 ♩ = 4个()
6个 ♩ = 3个()	8个 ♪ = 2个()	1个 ♩ = 2个()
4个 ♩ = 1个()	8个 ♩ = 2个()	4个 ♩ = 1个()
64个 ♪ = 8个()	8个 ♩ = ()个	8个 ♩ = ()个 ♪

十六、给下列短句填上合适的拍号

1. 

2. 

3. 

4. 

5. 

6. 

7. 

8. 

9. 

10. 

11. 

12. 

13. 

14. 

15. 

十七、为下列各小节填写合适的拍号









练习题二 音值组合法

一、按基本节奏型将下列时值重新组合（不可改变顺序）

(1) $\frac{2}{4}$  (1)

(2) $\frac{2}{4}$  (2)

(3) $\frac{2}{4}$  (3)

(4) $\frac{2}{4}$  (4)

(5) $\frac{2}{4}$  (5)

(6) $\frac{3}{4}$  (6)

(7) $\frac{3}{4}$  (7)


(8) $\frac{3}{4}$  (8)

(9) $\frac{3}{4}$  (9)

(10)  (10)

(11)  (11)

(12)  (12)

(13)  (13)

(14)  (14)

(15)  (15)

(16)  (16)

(17)  (17)

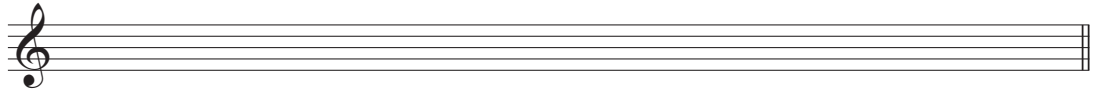
(18)  (18)

(19)  (19)


(20)  (20)

二、改正下列不正确的音值组合

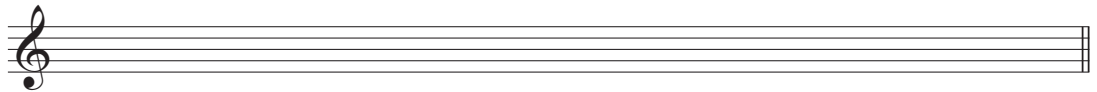
1. 




2. 



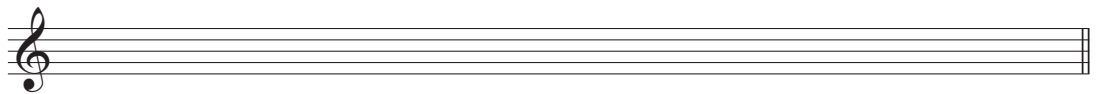
3. 




4. 



5. 




6. 



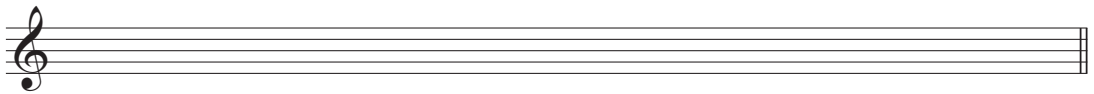
7. 




8. 



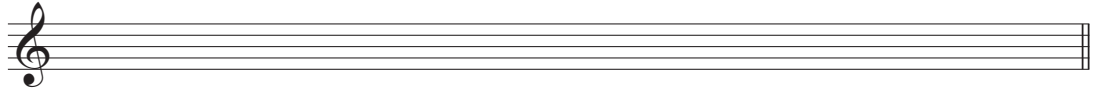
9. 




10. 




11. 



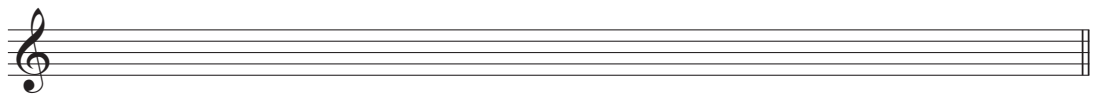
12. 




13. 



14. 



15. 



三、按长强短弱的规律找出强音，确定拍号并划分小节

1. 


2. 

3. 

四、用扩大音值的方法，把下例改为3/8、3/4、3/2拍

$\frac{3}{16}$ 

$\frac{3}{8}$ 

$\frac{3}{4}$ 

$\frac{3}{2}$ 

五、用缩小音值的方法，把下例改为2/4、2/8拍

$\frac{2}{2}$ 

$\frac{2}{4}$

$\frac{2}{8}$

六、将下列音符按2/4拍进行组合

1. 

2. 

七、将下列音符按3/4拍进行组合

1. 

2. 

八、将下列音符按3/8拍进行组合

1. 

2. 

九、将下列音符按4/4拍进行组合

1. 